

Cornell Institute for Biology Teachers

Copyright Cornell Institute for Biology Teachers, 2000.

This work may be copied by the original recipient from CIBT to provide copies for users working under the direction of the original recipient. All other redistribution of this work without the written permission of the copyright holder is prohibited.

Lab issue/rev. date: 1/12/99

Title:

Biological Shapes

Authors:

Jim Blankenship, Cornell University, Ithaca, NY.
Nancy Wright, Honeoye Central School, Honeoye, NY.

**Appropriate
Level:**

Life Science, High School, Honors, or Advanced Placement Biology

Abstract:

Remember the old salad dressing commercial tag-line "...because oil and vinegar don't mix!" Water has that same love/hate relationship with many other molecules. Through this series of lessons, students will learn about the properties which make other molecules "love" or "hate" water. They will also begin to build a concept of how molecules derive their shapes when placed in water-based environments such as cellular cytoplasm. The packet is divided into several activities that are described below and are meant to be completed in the order indicated.

1. "It's All in the Shape"- Students use gumdrops and toothpicks to build 3-dimensional models of simple molecules like water, alcohol, etc. In this exercise students learn that even simple molecules have 3-dimensional shapes, even though structural formulas appear to only have two dimensions.
2. "To Mix or Not to Mix" – In this lesson, students are provided with an opportunity to make selections, observations, and conclusions, and form hypotheses regarding solution miscibilities ("mixabilities"). In the process, students discover what makes a molecule either "water-loving" or "water-hating".
3. Through a demonstration, students will observe the behavior of oil droplets in alcohol. For homework, they will carry out a set of calculations and make some conclusions based on their calculations and their observations from the oil/alcohol demonstration.

4. “As the Molecule Turns,”- As preparation students will use references to learn about five different proteins of their choosing. They will also classify several of the 20 amino acid side chains as either “water-loving” or “water-hating”, based on the results of “To Mix or Not to Mix”. It is often terribly difficult for students to visualize such things as molecular structure and activity. Technology has developed, however, to a point that CAD programs are now available that can help us “see” molecules in their bonding arrangements. In this activity, students will use a computer program to visualize proteins and to discover how the behavior of “water-loving” and “water-hating” amino acids plays an important role in regard to protein shape.

Time Required: Three 45-minute in-class periods. Minimal teacher preparation time is required.

- National Science Standards:**
- Abilities of Scientific Inquiry:
 - Identify questions and concepts that guide scientific investigations
 - Design and conduct scientific investigations
 - Recognize and analyze alternative explanations and models
 - Challenge students to accept and share responsibility for their own learning.
 - Use multiple methods and systematically gather data about student understanding and ability.

Additional Teacher Information

Information with Which Students Should Be Familiar

- Students must understand that all molecules are composed of atoms. They must also understand that the atomic composition of a molecule will affect its 3-dimensional shape and properties.
- Students must be able to demonstrate mastery of the scientific method by asking a question, making observations, developing a hypothesis, testing this hypothesis, and drawing conclusions.
- Students should be familiar with the important roles that proteins play in a living organism.
- Students must be familiar with proteins and know that they are composed of amino acids. It is helpful if students are familiar with the elements of primary, secondary, and tertiary structure.

Materials

“It’s All in the Shape”:

- gumdrops (buy them in bulk and be certain that each group gets at least 12 gumdrops of one single color, 4 of a different color, and 3 of yet another different color. Stale gumdrops work best so, if possible, buy them and open the bag several weeks ahead of time.)
- toothpicks (2 boxes per class, ~12 per pair)
- scissors (1 per pair)
- colored pencils

“To Mix or Not to Mix - That is the Question”:

- Stock bottle of 70 % ethyl alcohol (~ 10 ml per pair - dry gas can be used as a cheaper substitute for alcohol)
- Stock bottle of methyl alcohol (~ 10 ml per pair)
- Stock bottle of vinegar (~ 10 ml per pair)
- Stock bottle of cooking oil (~ 15 ml per pair)
- Stock bottle of hexane (~ 10 ml per pair)
- labeling pens (1 per pair)
- calculators (1 per pair needed to complete first homework assignment)
- small test tubes (9 per pair)
- Test tube racks (1 per pair)
- disposable latex gloves (1 per pair of students)
- safety goggles or glasses (1 per student)
- Metric rulers (needed to complete first homework assignment)

Oil/alcohol mixing demonstration:

- glass petri dish bottoms (2)
- Cooking oil (~20 drops)
- Overhead projector for visualization
- 70% ethyl alcohol (~ 40 ml)
- dishwashing detergent (~ 5 drops)

“As the Molecule Turns”:

- Power Macintosh[®] computer equipped with Rasmac[®] v 2.6 and coordinate files for myoglobin and collagen or access to the Internet through Gopher[®] or Netscape[®]. (LC series Macintosh[®] computers are also adequate, but slower to respond.)
- Color coded phone cord (Several per class. Purchase 10 ft. phone cords. With the phone cord coiled tightly, divide into 10 more or less even sections. For every other section, use a magic marker to color the cord. The lines you have drawn will represent regions of the polypeptide chain that contain hydrophobic amino acid side chains. Uncolored regions will represent stretches of hydrophilic side chains.)
- Twisties (~100 per class)

Safety Considerations

Good laboratory practice should be followed while carrying out all aspects of the labs. In addition the following special safety considerations apply.

- **“It’s All in the Shape”:**

Have students construct candy molecule models in the classroom on clean desk surfaces rather than on lab benches so that chemical contamination of the food is not a concern. Have students wash their hands before beginning the gumdrop activity.

- **“To Mix or Not to Mix - That is the Question”:**

Carry out mixing experiments in a well-ventilated room and have students wear eye protection at all times. It is difficult to find organic solvents that are not flammable or toxic. Hexanes were chosen because they are among the least objectionable organic chemicals for use in the high school classroom. Since Hexane is flammable, use no open flames in the lab during the mixing experiments. The student mixing the tubes should wear a glove on one hand to prevent contact of chemicals with her/his skin. Students should wash their hands at the end of the mixing lab and more frequently if they spill chemicals during the lab.

Note to Teachers

- Students may find it difficult to visualize the tetrahedral arrangement of atoms bonded to carbon. For the gumdrop activity, you may find it useful to construct a gumdrop model of methane as a class project before breaking the students into groups of two. Instead of gumdrops, you could use 4 balloons blown to the same size. When twisted together, they will automatically form a tetrahedral structure.
- While the students are carrying out their mixing experiments set up the following demonstration. Put ~20 ml of alcohol into two petri dish bottoms. Add 5 drops of dishwashing detergent to one of the dishes and swirl to mix. Add 10 drops of cooking oil to each dish. Swirl vigorously, then place both dishes onto the overhead projector. Describe the demonstration to your students then leave the dishes undisturbed throughout the remaining part of the period so students can observe the results.
- In the mixing activity, as students design their hypothesis, it is feasible that they may decide that large molecules are soluble in large molecules while small molecules are soluble in other small molecules. Although this hypothesis is clearly not valid, the choice of chemicals available to them cannot be used to disprove this hypothesis. You should be prepared to intercede and push them to describe how they could definitively test their hypothesis.
- Some nonmiscible solutions do not have large differences in refractive index. As a result, it may be hard to see two phases. You might find it useful to have a bottle of food coloring in the lab so that you could dye one solution to make the two phases more distinctly different.

Answers to Questions

Homework 1

A			B	
100	100	Total # drops	1	1
~0.7 cm	~0.27 inches	diameter	~3.5 cm	~1.4 inches
~0.35 cm	~0.14 inches	radius	~1.75 cm	~0.7 inches
~154 cm ²	~24.6 inches ²	total surface area	~38 cm ²	~6.15 inches ²
~18 cm ³	~1.15 inches ³	total volume	~22 cm ³	~1.4 inches ³

1. Which case (A or B) has more surface area?
Case A has more surface area
2. a. In which case is more oil surface area in contact with alcohol?
Case A has more oil surface area in contact with alcohol.
b. In which case is the interaction between alcohol molecules more disrupted?
Because there is more surface area in contact, bonding between alcohol is more disrupted in A.
c. Which case is more stable and more likely to occur?
Case B will involve less disruption of bonds in alcohol and will therefore be more stable.

3. Use a complete sentence to explain how your mathematical prediction (above) compares with your observations on the behavior of dispersed droplets in alcohol.
Students should observe that the oil droplets coalesce with time. The mathematical proof carried out above should be consistent with this observation.

4. Based on this “**surface area concept**” in question #1 above, explain why two layers are formed when a “water-hating” solution is added to a “water-loving” solution.
When only a small volume of oil is added, it will form a drop to minimize contact with the alcohol. When a larger volume is added, formation of two layers minimizes the surface area and will be most stable.

5. Dry cleaners use “water-hating” solvents to clean soiled clothes. Explain why dry cleaning is an effective way to remove greasy stains.
Since “like dissolves like,” greasy stains will dissolve in “water-hating” solvents but not in water.

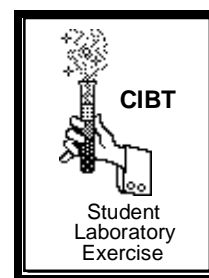
6. The following is a structural formula for a typical detergent.
 - a. Identify the “water-loving” and “water-hating” ends.
 - b. Using the cartoon structures of oil and detergent molecules given below, draw a sketch to show how oil can be coated with **many** detergent molecules so that the water loving parts on the detergent molecules will be exposed to the alcohol while the “water-hating” ends will be buried in the center against the oil.
The detergent will form a micelle with the oil in the center surrounded by many detergent molecules. The detergent molecules will be oriented with their water-hating ends facing the oil and their water-loving ends on the outer surface in contact with the aqueous solvent.

7. Based on the above information, when laundering in water, explain how a detergent works to remove oily stains from clothes.
When laundering with water, a detergent is used so that the grease or oil, which is insoluble in water, will become coated with detergent molecules (form a micelle), will become soluble, and will wash out of the fabric. In the same general way detergent coats oil in the mixing demonstration to form a micelle. This allows the oil droplets to disperse into tinier droplets.

Homework 2

3. Each amino acid side chain (R) can be classified as either “water-loving” or “water-hating” based on its structural formula. Given below are the structures of several side chains. For each of these side chains, indicate whether it is “water-loving” or “water-hating.”
Leucine, isoleucine and valine are “water-hating” and will be found in the inside core of the protein whereas glutamic acid, serine, aspartic acid, and threonine are “water-loving” and will be found on its surface.

“It’s All in the Shape”



Objectives

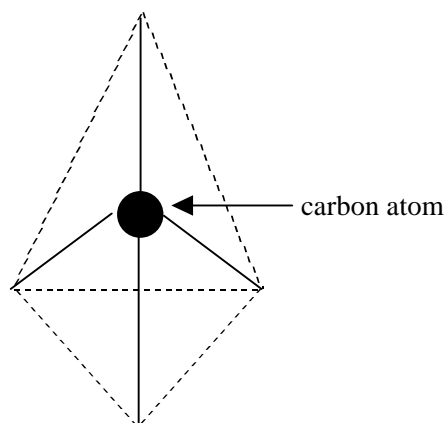
In this lab you will:

- construct models of molecules in order to learn that they have three dimensions even though the structural formulas show only two.
- identify simple chemical compounds such as water, ethyl alcohol, and methyl alcohol.

Introduction

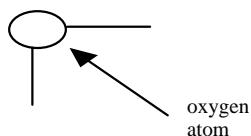
In your text books you have all probably seen structural formulas that specify the type and number of atoms that make up a molecule. You probably have also seen pictures of molecules printed on a 2- dimensional page. In both cases, molecules appear to be 2- dimensional structures when in fact they actually have 3- dimensional shapes that are often quite complex. Each atom that makes up a molecule has a characteristic size and can form only a limited number of bonds. For a given atom, bonds are formed in a precise geometry.

Carbon, Oxygen, and Hydrogen are three atoms that are commonly found in biological molecules. Carbon forms four bonds to other atoms in the following arrangement. (Note that the dark lines represent the bonds, the dashed triangle is to help you to visualize the bond angles.):



Hydrogen only forms a bond with a **single atom**.

Oxygen can form **two bonds** at the angle shown below.



So the 3-dimensional shape of even simple molecules is determined by its atoms.

Materials

- gumdrops (12 gumdrops of one single color, 4 of a different color, and 3 of yet another different color)
- toothpicks (~12)
- scissors
- colored pencils

Safety Precautions

- Good laboratory practice should be followed while carrying out all aspects of the lab.
- Wash your hands before beginning the activity.

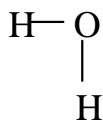
Procedure

1. Your teacher has provided you with a bag of gum drops and several toothpicks. Start by cutting about a dozen toothpicks in half. Sort your gumdrops by color. To complete this activity you will need 4 of one color (O, oxygen), 12 of a different color (H, hydrogen), and 3 of yet another color (C, carbon). Record the colors that you have chosen to use in the table that follows.

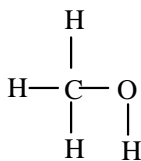
Atom	Color
O	
H	
C	

Using the structural formulas that follow **and the accurate bond angles** illustrated in the introduction, construct a model for water, methyl alcohol, and ethyl alcohol using toothpicks and gumdrops. **Remember you need to think in 3 dimensions!**

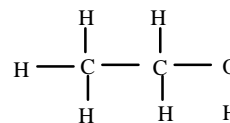
Water



Methyl Alcohol



Ethyl Alcohol



Using colored pencils, sketch the structure of each of your gumdrop models in the space below. Be sure to indicate which color corresponds to which atom.

water	methyl alcohol	ethyl alcohol

2. Now write the **structural formula** for each of these three compounds in the table below.

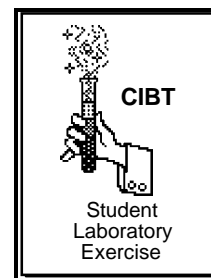
water	methyl alcohol	ethyl alcohol

How many dimensions are visible in the structural formula? _____

How many dimensions are visible in your gumdrop models? _____

3. Using gumdrops, make a model of one of the other compounds shown on the next page. Switch your model with another group and ask them to identify the chemical. What chemical have they built a model for?

“To Mix or Not to Mix - That is the Question”



Objectives

Students will be able to:

- demonstrate mastery of the scientific method by asking a question, making observations, developing a hypothesis, testing the hypothesis, and drawing conclusions.
- identify “water-loving” and “water-hating” molecules based on structural formulas.
- explain why dry cleaning is an effective way to remove greasy stains.

Introduction

Molecules can be crudely classified as either “water-loving” or “water-hating”, and interactions between these molecules and water play an important role in determining molecular shape. In this activity you will design and implement experiments in an attempt to identify any features that make a molecule either “water-loving” or “water-hating.”

Materials (per pair of students)

- 9 small test tubes
- labeling pen
- test tube rack
- safety goggles or glasses
- disposable latex gloves
- 70 % ethyl alcohol (~ 10 ml)
- methyl alcohol (~ 10ml)
- hexane (~ 10 ml)
- cooking oil (~ 15 ml)
- vinegar (~ 10ml)

Safety Precautions

- Good laboratory practice should be followed while carrying out all aspects of the lab.
- Carry out mixing experiments in a well-ventilated room.
- Wear eye protection at all times.
- Use no open flames in the lab during the mixing experiments since some of the chemicals are flammable.
- While you are mixing the tubes, wear a glove on one hand to prevent contact of chemicals with your skin.
- Wash your hands at the end of the mixing lab and more frequently if you spill chemicals on them during the lab.

Procedure

1. Your teacher has filled a petri dish bottom about one quarter full with alcohol and then added 10 drops of oil. After gently swirling the flask, it has been placed on the overhead projector for you to observe. In the space below, describe the initial appearance of the oil droplets (include observations on the number of drops and the sizes of the individual drops).

2. How does a detergent affect the solubility of oil in alcohol (or water)?

A second petri dish bottom has been prepared similarly only this time five drops of liquid dishwashing detergent has also been added. In the space below, describe the initial appearance of the oil droplets (include observations on the number of drops and the sizes of the individual drops).

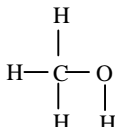
3. You may have heard the old phrase “like dissolves like”? You will now learn more about why this is true. You have been provided with the liquids shown below.

Liquid chemicals available:

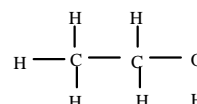
Water (1)



Methyl Alcohol (2)

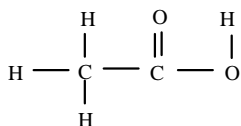


Ethyl Alcohol (3)

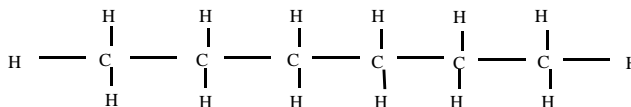


Acetic Acid (4)

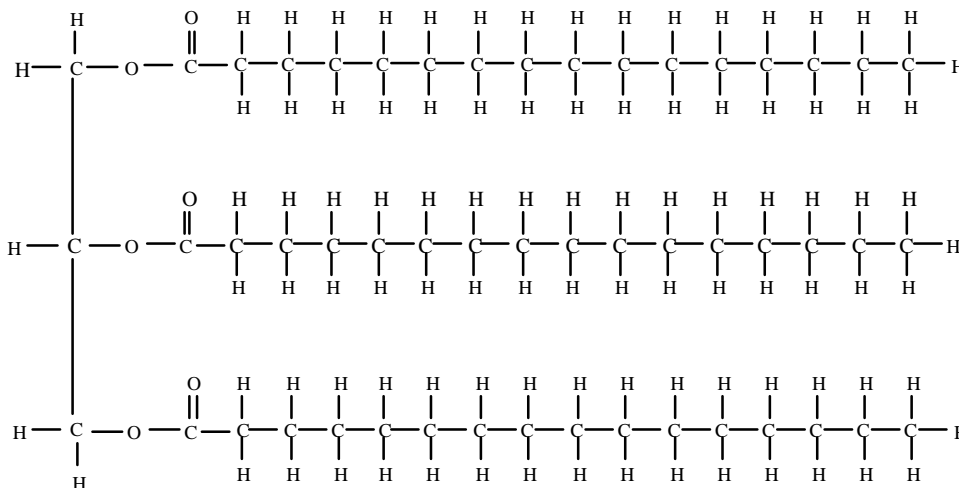
(vinegar)



Hexane (5)



Oil (6)



- a. From the list on the previous page, select six different mixtures to test for mixability.
- Record the mixtures that you plan to test in the second column of the table below.
 - Label six tubes “A” through “F.”
 - Pour the appropriate solution into the test tube until it is about 1/4 full.
 - Pour the second solution until the tube is about half full.
 - While wearing a latex glove, carefully cover the tube with your thumb and invert the tube to mix.
 - Determine whether the solutions mix giving one uniform solution or separate into layers.
 - Record your observation(s) in column 3 of the table below. Use “+” (plus) to represent mixable and “-“ (minus) to represent nonmixable.

Tube	Solutions Tested (use numbers from previous page - 1 for water, 2 for methyl alcohol, etc)	Mixable (+ / -)
A		
B		
C		
D		
E		
F		

- Draw lines between the structural formulas that mix with each other. If you identify more than one group of mixable solutions, use a different colored pencil to connect the chemicals in each group.
- b. Closely examine which solutions mixed and which didn't. Then go back and refer to their structural formulas. **Based on their structural formulas, write a hypothesis** in the space below that explains why some solutions could be mixed while others couldn't. (Please use complete sentences.)

- c. **To test your hypothesis**, choose 3 combinations that you have not already tested and predict whether or not they will be mixable. Record your predictions in the table below. Then try mixing the solutions and record your observations on the same table.

Solutions Tested (1,2,3,4,5, or 6)	Prediction? Mixable (+ or -)	Test results Mixable (+ or -)

1. Discuss whether your results support or contradict your hypothesis.


2. If your results do not match your predictions, write a new hypothesis that is consistent with all of your observations.

Describe how you would test your new hypothesis.


3. Now, return to the dishes of oil and alcohol prepared at the beginning of class. Make the following observations on each.

- With time, have the oil droplets dissolved, broken into smaller droplets, or recombined into larger droplets?

- Sketch the size, shape, and number of the oil droplets in the space below.



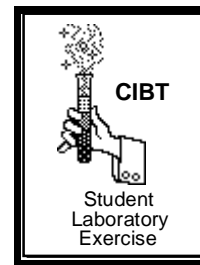
oil & alcohol
(without detergent)



oil & alcohol
(with detergent)

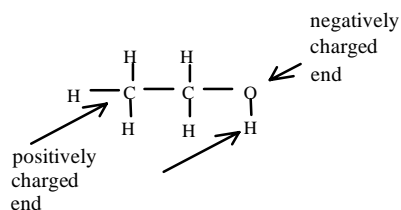
Name: _____

Date: _____



Homework 1

To explain your observations on the behavior of oil in ethyl alcohol, we will examine the structure of alcohol. Shown below is the molecular formula for ethyl alcohol.



Alcohol is called a “polar” molecule. Water is also a polar molecule. Because alcohol and water contain oxygen (O), they have one end which is positively charged while the other end carries a negative charge. They therefore behave somewhat like magnets that wish to interact with one another. These interactions stabilize the solution.

When an oil droplet is added to alcohol, there are three possible outcomes:

The oil droplet may break up in the alcohol leaving individual oil molecules in **solution**.

-or-

The oil droplet may break up into tiny dispersed droplets in **suspension**.

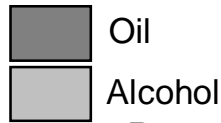
-or-

The oil molecules may recombine into a relatively small number of larger droplets.


In the diagram on the next page, the left box depicts many small oil droplets, while, the right box shows one large oil droplet with about the same total volume as all the tiny droplets added up.

- Using a metric ruler, measure the diameter of one small (assume all the droplets in box A are the same size) and the large droplet in box B.
- Count the total number of droplets in each box.


- Use the formulas given to calculate the total volume of the oil droplet(s) and the total surface area of oil exposed to alcohol in each box. In each case, record your values in the spaces provided. **Please be sure to include units and to keep the units the same for both A and B!**



A.



B.



_____ total number of droplets _____

_____ diameter _____

_____ radius _____

_____ total surface area = $(4\pi r^2) \times (\#drops)$ _____
of all drops

_____ total volume = $1.3(\pi r^3) \times (\#drops)$ _____
of all drops

use $\pi = 3.14$

Based on your calculations

1. Which case (A or B) has more surface area?
2. Since oil contains no OH groups, it does not act like a magnet and it cannot interact with alcohol or water. In fact, oil **reduces** the amount of interaction between individual alcohol molecules and therefore reduces the stability of the alcohol. When oil is added to alcohol, the arrangement of oil molecules will adjust to minimize the loss of interactions between individual alcohol molecules.
 - a. In which case is more oil surface area in contact with alcohol? _____
 - b. In which case is the interaction between alcohol molecules more disrupted?

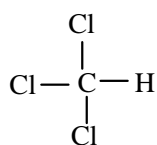
 - c. Thinking about your answers to questions **a** and **b** above, which case is more stable and more likely to occur? _____

Explain why.

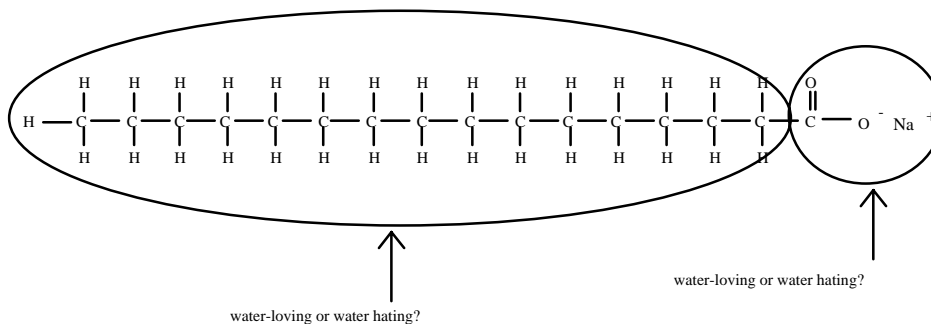
3. Use a complete sentence to explain how your mathematical prediction (above) compares with your observations of the behavior of dispersed oil droplets in alcohol seen in the demonstration.

4. Based on the “surface area concept” in question 1 above, explain why two layers are formed when a “water-hating” solution is added to a “water-loving” solution.

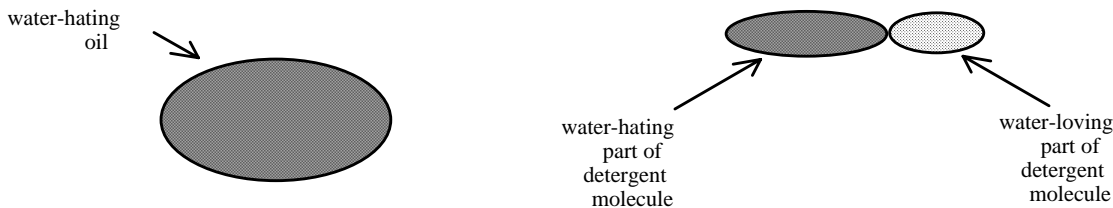
5. Dry cleaners use “water-hating” solvents rather than water to clean soiled clothes. The structure of trichloromethane, a typical dry cleaning solvent, is shown below. Explain why dry cleaning is an effective way to remove greasy stains.



6. The following is a structural formula for a typical detergent.

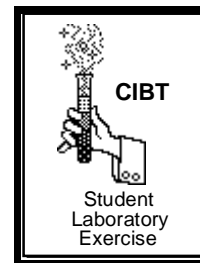


- a. Identify the “water-loving” and “water-hating” ends.
- b. Using the structures of oil and detergent molecules shown below, draw a sketch to show how oil can be coated with many detergent molecules so that the water loving parts on the detergent molecules will be exposed to the alcohol while the “water-hating” ends will be buried in the center against the oil.



Name: _____

Date: _____



Homework 2

1. It is astounding to discover the diverse roles of proteins in living systems. Go to an encyclopedia or other reference book and look up “protein.” In the space below list five specific kinds of proteins with which you either are already familiar with or that you learned about from your textbook. For each protein, write one complete sentence that describes its function in a living organism.

1.

2.

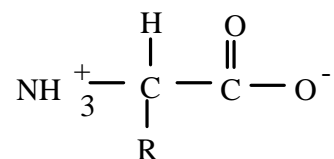
3.

4.

5.

Compare your examples with those found by your classmates.

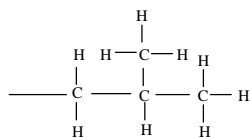
2. Proteins are made up of amino acids. Listed below is the general formula for an amino acid using R to represent the side chain:



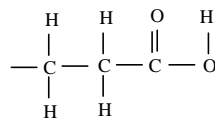
Draw a chain of three amino acids joined by peptide bonds.

3. The side chain, or R group, of each amino acid can be classified as either “water-loving” or “water-hating” based on its structural formula.

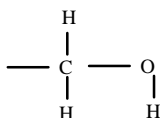
Given below are the structures of several side chains. Circle whether each side chain is “water-loving” or “water-hating.”



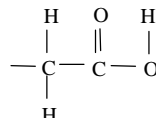
leucine (Leu)
water loving / water hating



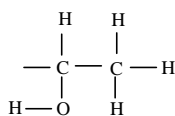
glutamic acid (Glu)
water loving / water hating



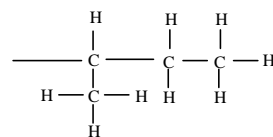
serine (Ser)
water loving / water hating



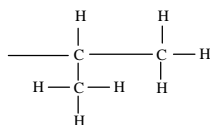
aspartic acid (Asp)
water loving / water hating



threonine (Thr)
water loving / water hating

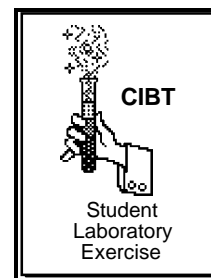


isoleucine (Ile)
water loving / water hating



valine (Val)
water loving / water hating

“As the Molecule Turns”



Objectives

Students will be able to:

- explain the concepts of “water-loving” and “water-hating” molecular interactions.
- identify some 3-D shapes of proteins which have had their structures solved in research laboratories.
- demonstrate how to use a computer imaging program.

Introduction

Interestingly, the behavior of “water-loving” and “water-hating” molecules plays an important role in biological systems. In fact it underlies the shape of proteins which is critical to their function. Proteins are long chains of amino acids connected by peptide bonds. After being synthesized, these chains fold back upon themselves to form 3-dimensional shapes that give the individual protein its function.

In this activity you will use a Macintosh[®] computer loaded with a program called Rasmac[®]. The Rasmac[®] program allows you to see the 3-dimensional shape of any protein whose structure has been solved in a research lab using modern high-resolution techniques. You will study a couple of interesting proteins, then you will discover why proteins fold into specific 3-dimensional shapes.

In general, proteins are primarily for **strength** or they bind to specific substrates and then catalyze the **conversion** of the substrate molecules into something different (enzymes).

As you look at the shapes of the various proteins, try to think about what makes this particular protein special. Consider how the shape of the protein gives it one or the other of these features.

Materials

- Macintosh[®] computer loaded with the Rasmac[®] v2.6 (or higher) visualization program and data files for collagen and myoglobin.

Procedure

1. We will first examine the structure of collagen. Collagen, the most abundant protein in mammals, is the fibrous component of skin, bone, tendons, cartilage, and teeth. Collagen is an incredibly strong fibrous protein because it is composed of three strands packaged into a bundle, much like a cable.

Double click on the Rasmac[®] icon to open the program. From the **File** menu, select **Open**. Find and select the file called **Collagen** and click on **Open**.

You should be able to find two windows on the screen. The Main window contains the image of collagen, and the Command window allows you to type in commands. You should currently be in the Main window but if the Command window is active, pull down the **Window** menu and select **Main**.

- Rotate the molecule by clicking on the image of the protein and dragging it around on the screen.
- In the **Display** menu, experiment with the wire frame, ball and stick, and space filling models to see which you think more clearly illustrates the protein.
- You may find it easier to trace the backbone of the protein by adding a ribbon. To do this, pull down the **Display** menu and select **Ribbon**.
- You can zoom in and out by pressing the shift key while dragging across the image.

In the space below, sketch the overall shape of the molecule visible on the screen.

- o Make a sketch predicting how collagen molecules would be aligned in structures such as bone.

- Explain why collagen strengthens tissues where it is present.

- When you are done, pull down the **File** menu and select **Close** to remove the image of collagen.

2. You will now study the protein myoglobin. Myoglobin is an oxygen storage protein found in vertebrate muscle tissue. Protein enzymes usually fold into a “glob” with a substrate-binding cleft on one surface. In the case of myoglobin, it is within this cleft that oxygen is bound.

- From the **File** menu, select **Open**. Find and select the file called **Myoglobin** then click on **Open**.
- Pull down the **Window** menu and select **Command**. When the command window appears, type the following:

select protein <return>

color green (or another color of your choice) <return>

- Pull down the **Window** menu and select **Main**. When the molecule appears, the protein will be colored green.
- Pull down the **Display** menu and select **Ribbon**. The image will be shown with a ribbon that traces the backbone of the protein. The side chains on the amino acids will not be shown.

- The special job of the protein part of the myoglobin is to hold the heme group that binds to the oxygen. To allow you to find the heme group, you will color it blue. Pull down the **Window** menu and select **Command**. Then type in the following:

select hem <return>

color blue <return>

spacefill <return>

- Pull down the **Window** menu and select **Main**. The image now shows the heme oxygen-binding group in blue. The “spacefill” function shows the actual three-dimensional space occupied by the group. The protein itself remains green.

Can you see a cleft in the protein that has a shape complementary to the heme group?

- To observe the fit between the protein cleft and the heme group, you will now add spacefill features to the protein. Pull down the **Window** menu and select **Command**. Type the following:

select protein <return>

spacefill<return>

- Pull down the **Window** menu and select **Main**.

Describe the fit between the heme and the protein cleft.

- Pull down the **File** menu and select **Quit** to end the session.

3. A protein folds based on the sequence of amino acids in the chain. The “water-loving” side chains interact favorably with water whereas the “water-hating” side chains will interfere with bonding between water molecules.

- Obtain a color-coded phone cord from your teacher. The colored marks indicate positions in the amino acid chain where “water-hating” side chains are found. The “water-hating” side chains will try to escape into the center while the “water-loving” side chains will form the surface that will be in contact with water.

Fold the phone cord in the way you would predict this chain of amino acids would fold in a cell that is water-based. Use twisties to hold things in place. Make a sketch of your result in the space below. **Be sure to indicate the location of the colored marks in your sketch.**

4. You will now try to correlate the prediction that you made using the color coded phone cord to the actual position of water-hating amino acid side chains in myoglobin. If necessary, return to homework #2 and complete the missing information in the chart below.

Amino Acid(s)	Water-hating or Water-loving?
aspartate (Asp)	_____
glutamate (Glu)	_____
cysteine, methionine (Cys, Met)	water-hating
lysine, arginine (Lys, Arg)	water-loving
serine (Ser)	_____
threonine (Thr)	water-loving
phenylalanine, tyrosine (Phe,Tyr)	water-hating
asparagine, glutamine (Asn,Gln)	water-loving
glycine (Gly)	water-loving
leucine, valine, isoleucine (Leu,Val,Ile)	_____
alanine (Ala)	water-hating
tryptophane (Trp)	water-hating
histidine (His)	water hating

You will now study the location of water-loving and water-hating amino acids in myoglobin.

- Double click on the Rasmac[®] icon to open the program. From the **File** menu, select **Open**, find the file called **myoglobin**, and select **Open**.
- Pull down the **Window** menu and select **Command**. Then type in the following:

select protein <return>

color green <return>

select Lys,Arg,Thr,Asn,Gln (Also add to the list the three letter code for any other amino acid side chains that you identified as water-loving in the table above) <return>

color blue <return>

Pull down the **Window** menu and select **Main** to see the result.

- o• Pull down the **Window** menu and select **Command**. Type the following:

select protein <return>

spacefill <return>

Pull down the **Window** menu and select **Main** to see the result. Pull down the **Options** menu and select **Slab Mode**. Use the vertical and horizontal scroll bars to slice the protein through various planes.

What fraction of the water-loving (blue) amino acids appear to be in the center of the protein? Is this consistent with your phone cord model?

Where in the folded protein do the water-loving side chains (colored blue) appear to be located? Is this consistent with your phone cord model?

- When you are ready to end the session, pull down the **File** menu and select **Quit**.